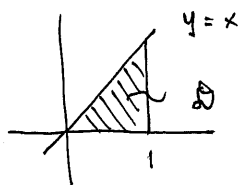


MAT 261—Exam #3—11/13/14

Name: Solutions

Calculators are not permitted. Show all of your work using correct mathematical notation.

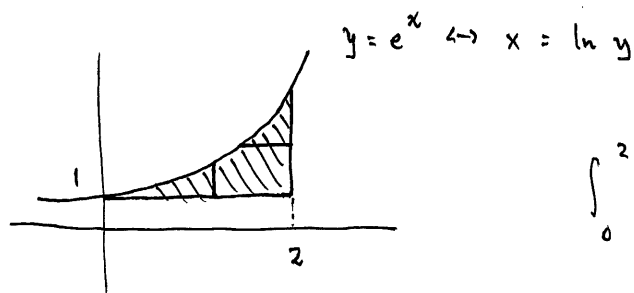
1. (15 points) Find the average value of the function $f(x, y) = x + \sqrt{y}$ over the triangle bounded by the lines $y = 0$, $x = 1$, and $y = x$.



$$\text{Area (D)} = \frac{1}{2}$$

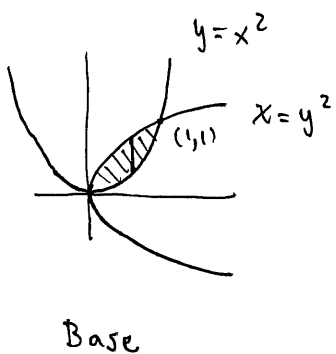
$$\begin{aligned} \bar{f} &= 2 \int_0^1 \int_0^x (x + \sqrt{y}) \, dy \, dx \\ &= 2 \int_0^1 \left(xy + \frac{2}{3} y^{3/2} \right) \Big|_0^x \, dx \\ &= 2 \int_0^1 \left(x^2 + \frac{2}{3} x^{3/2} \right) \, dx \\ &= 2 \left(\frac{x^3}{3} + \frac{4}{15} x^{5/2} \right) \Big|_0^1 \\ &= 2 \left(\frac{1}{3} + \frac{4}{15} \right) \\ &= \frac{6}{5} \end{aligned}$$

2. (10 points) Consider the integral $\int_0^2 \int_1^{e^x} f(x, y) \, dy \, dx$. Sketch the domain of integration, and set up an equivalent integral with the order of integration reversed.



$$\begin{aligned} &\int_0^2 \int_1^{e^x} f(x, y) \, dy \, dx \\ &= \int_1^{e^2} \int_{\ln y}^2 f(x, y) \, dx \, dy \end{aligned}$$

3. (10 points) Set up (but do not evaluate) an integral that gives the volume of a solid whose base is the region in the xy -plane between the curves $y = x^2$ and $x = y^2$ and whose upper boundary is the elliptical paraboloid $z = 9 - x^2 - 2y^2$.

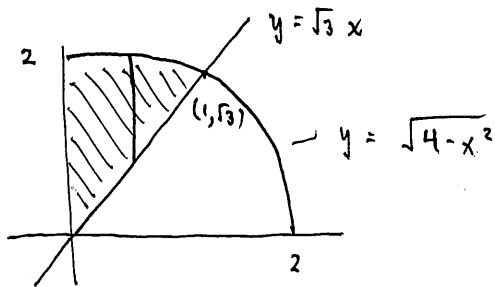


Height function: $f(x, y) = 9 - x^2 - 2y^2$

$$V = \int_0^1 \int_{x^2}^{\sqrt{x}} (9 - x^2 - 2y^2) dy dx$$

4. (15 points) Evaluate the integral $\int_0^1 \int_{\sqrt{3}x}^{\sqrt{4-x^2}} (x^4y + x^2y^3) dy dx$ by changing to polar coordinates. Include a sketch of the domain.

$x^2y (x^2 + y^2)$



Along the line $y = \sqrt{3}x$ we have

$$\tan \theta = \sqrt{3} \Rightarrow \theta = \pi/3,$$

so the integral becomes

$$\int_{\pi/3}^{\pi/2} \int_0^2 (r \cos \theta)^2 (r \sin \theta) r^2 \cdot r dr d\theta$$

$$= \int_{\pi/3}^{\pi/2} \cos^2 \theta \sin \theta d\theta \int_0^2 r^6 dr$$

$$= \left[-\frac{\cos^3 \theta}{3} \right]_{\pi/3}^{\pi/2} \cdot \left[\frac{r^7}{7} \right]_0^2$$

$$= \frac{1}{3} \cdot \left(\frac{1}{2}\right)^3 \cdot \frac{2^7}{7} = \frac{16}{21}$$

5. (15 points) Evaluate the triple integral $\int_0^1 \int_0^2 \int_0^1 \frac{yz^4 \sin(\pi x)}{3+y^2} dz dy dx$.

$$\begin{aligned}
 &= \int_0^1 \sin(\pi x) dx \int_0^2 \frac{y}{3+y^2} dy \int_0^1 z^4 dz \\
 &= -\frac{1}{\pi} \cos(\pi x) \Big|_0^1 \cdot \frac{1}{2} \ln(3+y^2) \Big|_0^2 \cdot \frac{1}{5} z^5 \Big|_0^1 \\
 &= -\frac{1}{\pi} (-1 - 1) \cdot \frac{1}{2} (\ln 7 - \ln 3) \cdot \frac{1}{5} \\
 &= \frac{1}{5\pi} \ln(7/3)
 \end{aligned}$$

6. (15 points) Consider the integral $\iint_{\mathcal{D}} (x+y) dA$, where \mathcal{D} is the parallelogram in the xy -plane spanned by the vectors $\langle 5, 2 \rangle$ and $\langle 1, 3 \rangle$. Use the transformation

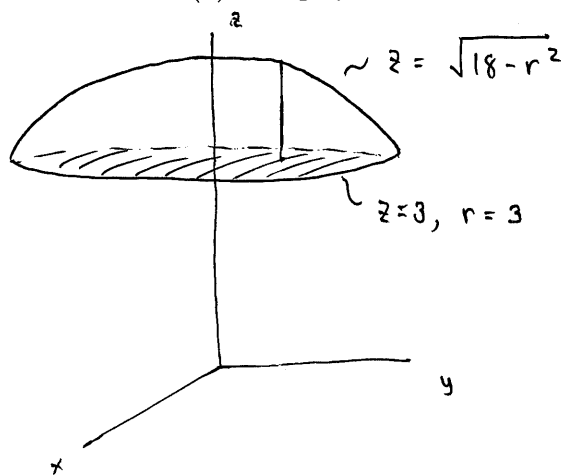
$$G(u, v) = (5u + v, 2u + 3v)$$

to evaluate the integral.

$$\begin{aligned}
 \text{Jac}(G) &= \begin{vmatrix} 5 & 1 \\ 2 & 3 \end{vmatrix} = 13 \\
 \iint_{\mathcal{D}} (x+y) dA &= \int_0^1 \int_0^1 (7u + 4v) \cdot 13 du dv \\
 &= 13 \int_0^1 \left(\frac{7}{2} u^2 + 4uv \right) \Big|_0^1 dv \\
 &= 13 \int_0^1 \left(\frac{7}{2} + 4v \right) dv \\
 &= 13 \left(\frac{7}{2} v + 2v^2 \right) \Big|_0^1 \\
 &= 13 \left(\frac{7}{2} + 2 \right) \\
 &= \frac{143}{2}
 \end{aligned}$$

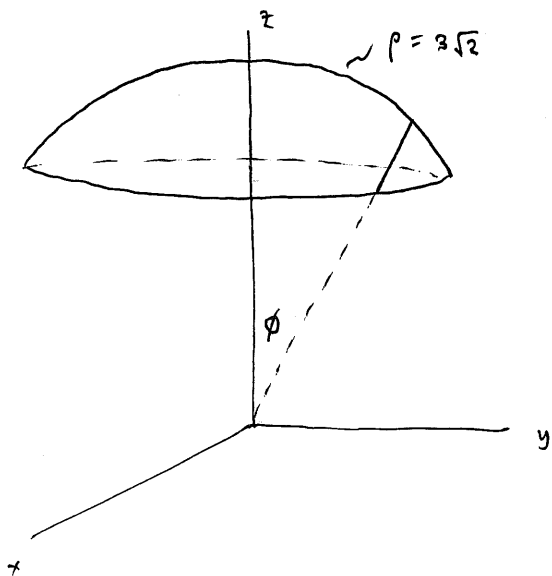
7. (20 points) An object occupying the region defined by the inequalities $x^2 + y^2 + z^2 \leq 18$ and $z \geq 3$ has mass density $\delta(x, y, z) = 5/z$ kg per cubic unit. Set up (but do not evaluate) integrals that give the mass of the object:

(a) using cylindrical coordinates

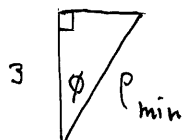


$$M = \int_0^{2\pi} \int_0^3 \int_3^{\sqrt{18-r^2}} \frac{5}{z} \cdot r \, dz \, dr \, d\theta$$

(b) using spherical coordinates



$$M = \int_0^{2\pi} \int_0^{\pi/4} \int_{3 \sec \phi}^{3\sqrt{2}} \frac{5}{\rho \cos \phi} \cdot \rho^2 \sin \phi \, d\rho \, d\phi \, d\theta$$



$$\rho_{\min} = \frac{3}{\cos \phi} = 3 \sec \phi$$

$$\cos \phi_{\max} = \frac{3}{\sqrt{18}} = \frac{1}{\sqrt{2}} \Rightarrow \phi_{\max} = \frac{\pi}{4}$$